

Mathematics

Date: 27/ 06/2022
Period: From 8:30 -09.30



END OF TERM III EXAMINATIONS

GRADE
OPTION

PRIMARY ONE
PRIMARY

DURATION: 1 HOUR

MARKS:

40

INSTRUCTIONS

- 1) This paper consists of **one** section
Section A: Attempt **all** questions. (40marks)
- 2) **Geometrical instruments may be used may be used.**
- 3) Use only a **blue** or **black** pen.

Section A: Answer all questions

(40marks)

1. Rewrite this number

(4marks)

64 ; ____ ; ____ ; ____ ; ____

2) Fill in the missing numbers

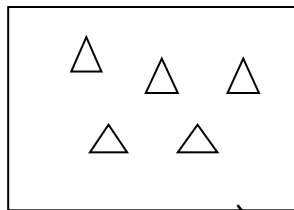
11; 12 ; 13 ; ____; 15 ; 16 ; ____; 18; ____; ____ **(4marks)**

3) Multiply $5 \times 2 = \dots$

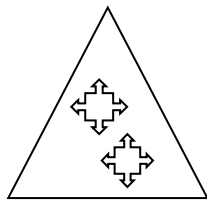
(4marks)

4) Match the following objects in the figures with their correct number


(4marks)



2



4



5

5) Fill in the missing numbers

(4marks)

41 = ___ Tens ___ ones.

6) Add vertically $43 + 21 =$

(4marks)

7) Fill in with $\frac{1}{2}$ or $\frac{1}{4}$

(4marks)

--	--


8) Ella has 100F, she used 50F on buying a pen. How much money did she remain with ?


(4marks)


9) Emmy planted 13 trees on Monday and 20 trees on Tuesday. How many trees did he plant all together .


(4marks)

10) Fill in with **Vertical line; horizontal line; oblique line; zigzag line**
(4marks)

i)  is a.....

ii)  is a

iii)  is an

iv)  is a

END